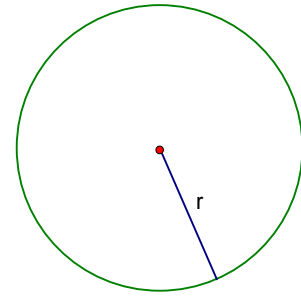


Notes #15: Area and Circumference of Circles (Section 11.5)

Circles:

Area = _____

Circumference = _____ or _____



Complete the table:

1. 2. 3. 4. 5.

Diameter	10				
Radius		$2\sqrt{5}$			
Circumference ($2\pi r$)			6π		
Area (πr^2)				81π	8π

1.)

2.)


3.)

4.)

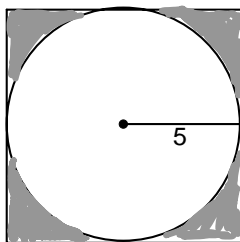
5.)

Find the area of each region:

6.)



7.)



8.)

